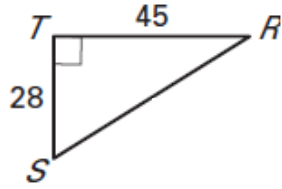


Name _____

Hour _____

Solve the right triangle. Round decimal answers to the nearest hundredth.

1. Find RS .



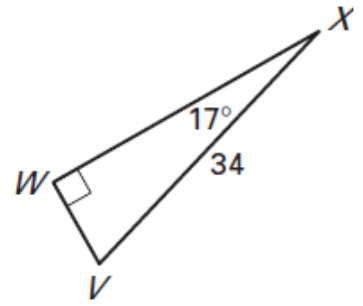
2. Find $m\angle R$.

3. Find $m\angle S$.

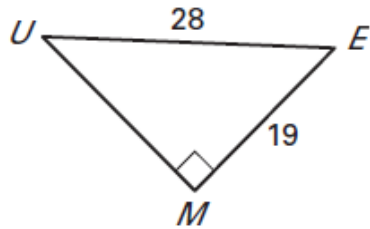
4. Find $m\angle V$.

5. Find VW .

6. Find WX .



7. Find MU .



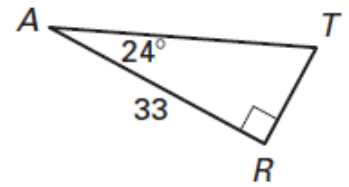
8. Find $m\angle E$.

9. Find $m\angle U$.

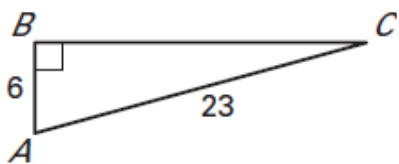
10. Find $m\angle T$.

11. Find AT .

12. Find RT .



13. Find BC .



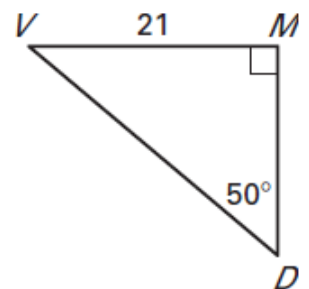
14. Find $m\angle A$.

15. Find $m\angle C$.

16. Find $m\angle V$.

17. Find DM .

18. Find DV .



Solving Right Triangles

Find the unknown side lengths. Write answers in the simplest radical form.

